
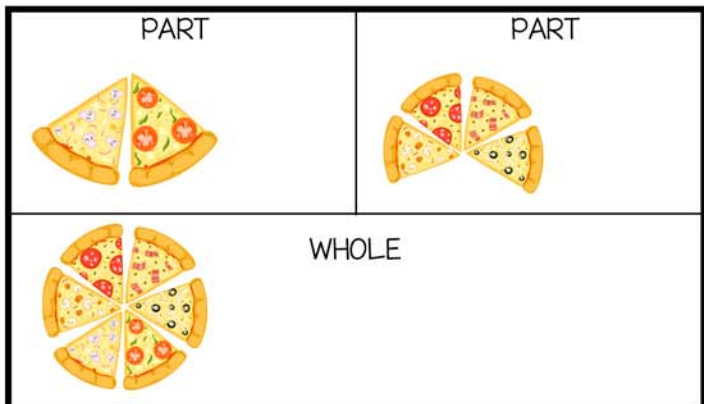


NUMBER SENTENCE

$$\text{PART} \text{-----} + \text{PART} \text{-----} = \text{WHOLE} \text{-----}$$




Name: _____



NUMBER SENTENCE

$$\underline{\quad\quad\quad} + \underline{\quad\quad\quad} = \underline{\quad\quad\quad}$$


PART PART WHOLE



NUMBER SENTENCE

$$\underline{\quad\quad\quad} + \underline{\quad\quad\quad} = \underline{\quad\quad\quad}$$


PART PART WHOLE



NUMBER SENTENCE

$$\underline{\quad\quad\quad} + \underline{\quad\quad\quad} = \underline{\quad\quad\quad}$$

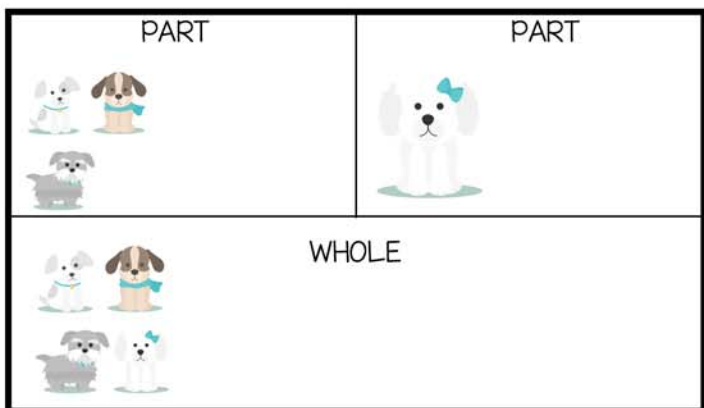
PART PART WHOLE



NUMBER SENTENCE

$$\underline{\quad\quad\quad} + \underline{\quad\quad\quad} = \underline{\quad\quad\quad}$$

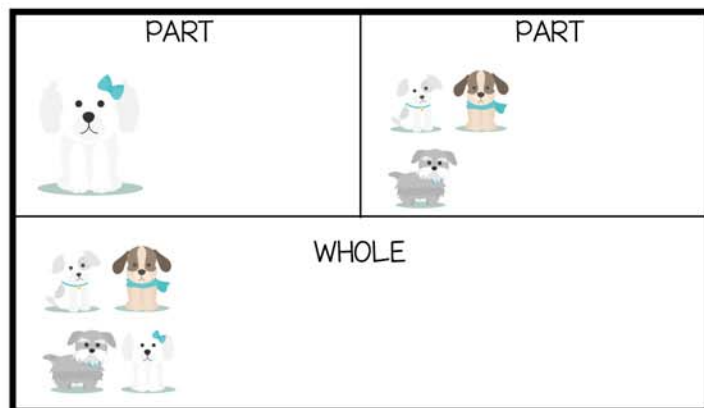
PART PART WHOLE



NUMBER SENTENCE

$$\underline{\quad\quad\quad} + \underline{\quad\quad\quad} = \underline{\quad\quad\quad}$$

PART PART WHOLE



NUMBER SENTENCE

$$\underline{\quad\quad\quad} + \underline{\quad\quad\quad} = \underline{\quad\quad\quad}$$

PART PART WHOLE

Name: _____

PART 2	PART
WHOLE 3	

NUMBER SENTENCE

$$\frac{\text{PART}}{\text{PART}} + \frac{\text{PART}}{\text{PART}} = \frac{\text{WHOLE}}{\text{WHOLE}}$$

PART 1	PART 2
WHOLE	

NUMBER SENTENCE

$$\frac{\text{PART}}{\text{PART}} + \frac{\text{PART}}{\text{PART}} = \frac{\text{WHOLE}}{\text{WHOLE}}$$

PART 7	PART
WHOLE 9	

NUMBER SENTENCE

$$\frac{\text{PART}}{\text{PART}} + \frac{\text{PART}}{\text{PART}} = \frac{\text{WHOLE}}{\text{WHOLE}}$$

PART	PART 2
WHOLE 9	

NUMBER SENTENCE

$$\frac{\text{PART}}{\text{PART}} + \frac{\text{PART}}{\text{PART}} = \frac{\text{WHOLE}}{\text{WHOLE}}$$

PART 4	PART
WHOLE 7	

NUMBER SENTENCE

$$\frac{\text{PART}}{\text{PART}} + \frac{\text{PART}}{\text{PART}} = \frac{\text{WHOLE}}{\text{WHOLE}}$$

PART	PART 3
WHOLE 7	

NUMBER SENTENCE

$$\frac{\text{PART}}{\text{PART}} + \frac{\text{PART}}{\text{PART}} = \frac{\text{WHOLE}}{\text{WHOLE}}$$